


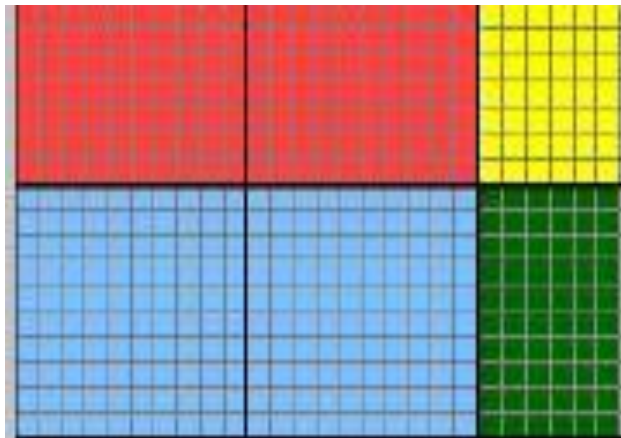
Card Set A



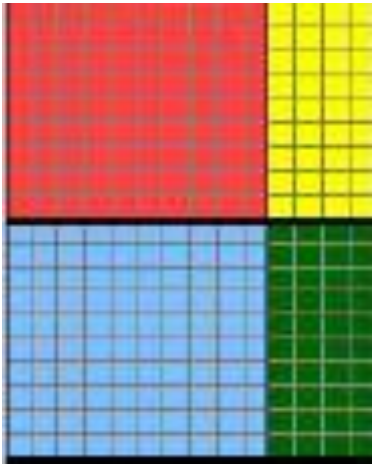
Card Set A



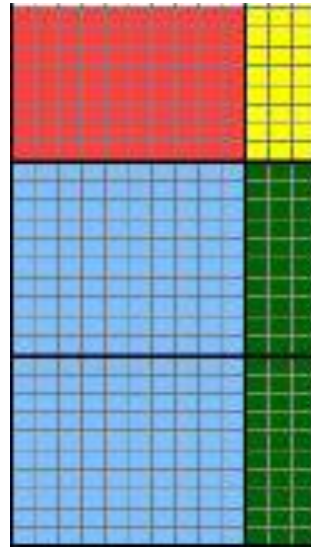
Card Set A



Card Set A



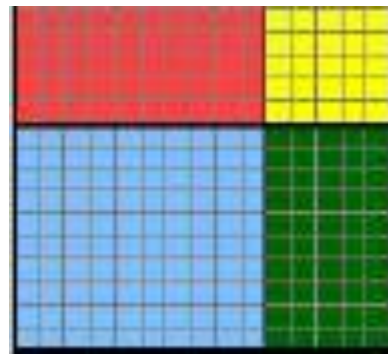
Card Set A



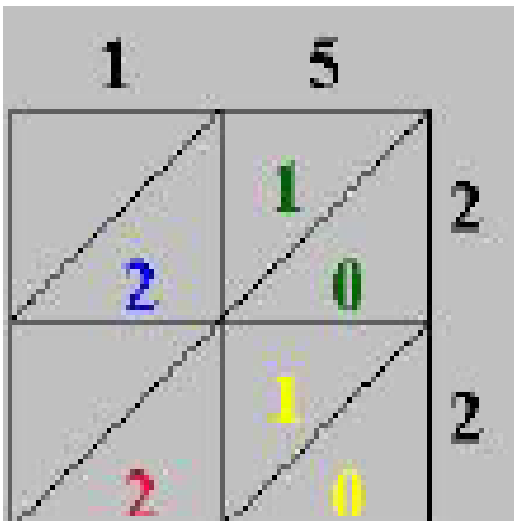
Card Set A



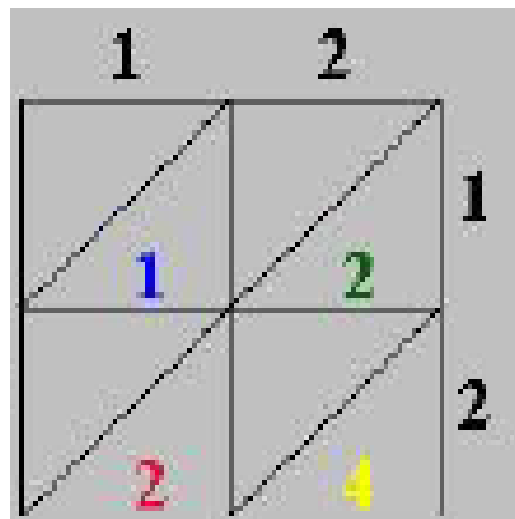
Card Set A



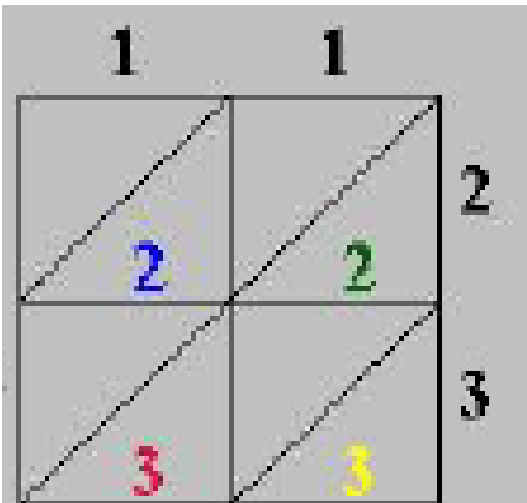
Card Set A



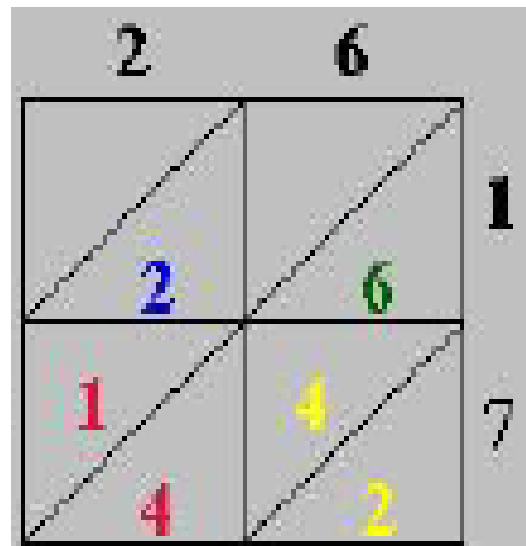
Card Set B



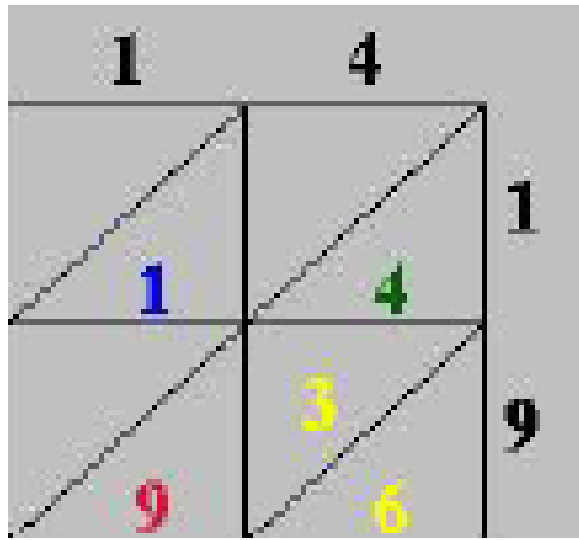
Card Set B



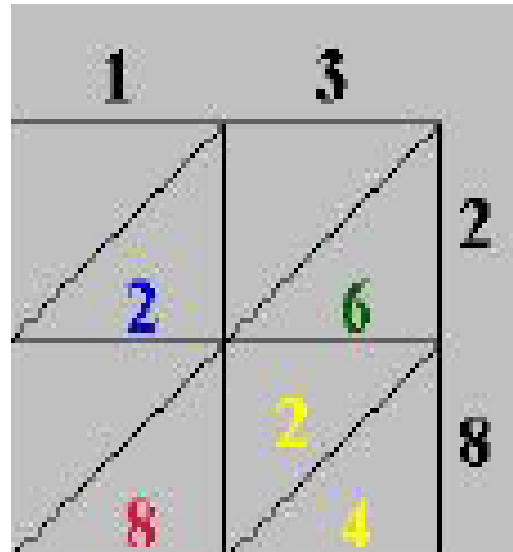
Card Set B



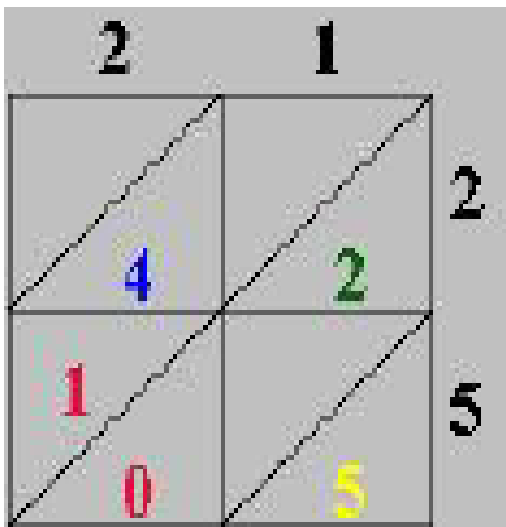
Card Set B



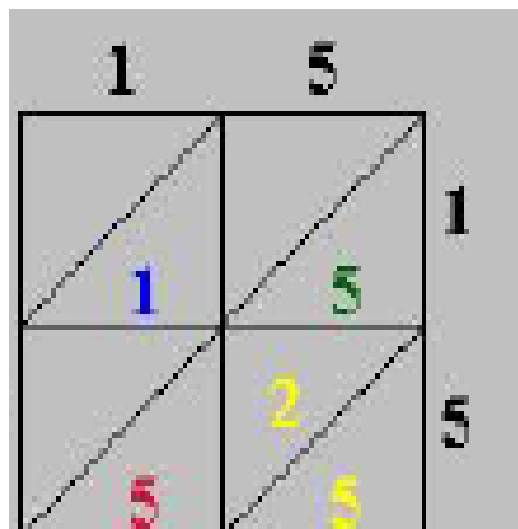
Card Set B



Card Set B



Card Set B



Card Set B

$$(20 + 2) \times (10 + 5) =$$

$$20 \times 10 + 2 \times 10 + 20 \times 5 + 2 \times 5 =$$

Card Set C

$$(20 + 3) \times (10 + 1) =$$

$$20 \times 10 + 3 \times 10 + 20 \times 1 + 3 \times 1 =$$

Card Set C

$$(10 + 9) \times (10 + 4) =$$

$$10 \times 10 + 9 \times 10 + 10 \times 4 + 9 \times 4 =$$

Card Set C

$$(20 + 5) \times (20 + 1) =$$

$$20 \times 20 + 5 \times 20 + 20 \times 1 + 5 \times 1 =$$

Card Set C

$$(10 + 2) \times (10 + 2) =$$

$$10 \times 10 + 2 \times 10 + 10 \times 2 + 2 \times 2 =$$

Card Set C

$$(10 + 7) \times (20 + 6) =$$

$$10 \times 20 + 7 \times 20 + 10 \times 6 + 7 \times 6 =$$

Card Set C

$$(20 + 8) \times (10 + 3) =$$

$$20 \times 10 + 8 \times 10 + 20 \times 3 + 8 \times 3 =$$

Card Set C

$$(10 + 5) \times (10 + 5) =$$

$$10 \times 10 + 5 \times 10 + 10 \times 5 + 5 \times 5 =$$

Card Set C

$$\begin{array}{r} 15 \\ \times 22 \\ \hline 10 \\ 20 \\ 100 \\ \underline{200} \end{array}$$

Card Set D

$$\begin{array}{r} 12 \\ \times 12 \\ \hline 4 \\ 20 \\ 20 \\ \underline{100} \end{array}$$

Card Set D

$$\begin{array}{r} 11 \\ \times 23 \\ \hline 3 \\ 30 \\ 20 \\ \underline{200} \end{array}$$

Card Set D

$$\begin{array}{r} 26 \\ \times 17 \\ \hline 42 \\ 140 \\ 60 \\ \underline{200} \end{array}$$

Card Set D

$$\begin{array}{r} 14 \\ \times 19 \\ \hline 36 \\ 90 \\ 40 \\ \hline 100 \end{array}$$

Card Set D

$$\begin{array}{r} 13 \\ \times 28 \\ \hline 24 \\ 80 \\ 60 \\ \hline 200 \end{array}$$

Card Set D

$$\begin{array}{r} 21 \\ \times 25 \\ \hline 5 \\ 100 \\ 20 \\ \hline 400 \end{array}$$

Card Set D

$$\begin{array}{r} 15 \\ \times 15 \\ \hline 25 \\ 50 \\ 50 \\ \hline 100 \end{array}$$

Card Set D

$$\begin{array}{r} 26 \\ \times 17 \\ \hline 182 \\ 260 \\ \hline \end{array}$$

Card Set E

$$\begin{array}{r} 14 \\ \times 19 \\ \hline 126 \\ 140 \\ \hline \end{array}$$

Card Set E

$$\begin{array}{r} 15 \\ \times 22 \\ \hline 30 \\ 300 \\ \hline \end{array}$$

Card Set E

$$\begin{array}{r} 12 \\ \times 12 \\ \hline 24 \\ 120 \\ \hline \end{array}$$

Card Set E

$$\begin{array}{r} 11 \\ \times 23 \\ \hline 33 \\ 220 \\ \hline \end{array}$$

Card Set E

$$\begin{array}{r} 13 \\ \times 28 \\ \hline 104 \\ 260 \\ \hline \end{array}$$

Card Set E

$$\begin{array}{r} 21 \\ \times 25 \\ \hline 105 \\ 420 \\ \hline \end{array}$$

Card Set E

$$\begin{array}{r} 15 \\ \times 15 \\ \hline 75 \\ 150 \\ \hline \end{array}$$

Card Set E

The deck Scott is building needs twenty-six boards and each board needs seventeen nails. How many nails does Scott need to buy?

Card Set F

An opossum sleeps an average of nineteen hours per day. How many hours does it sleep in a 2-week time period?

Card Set F

Cam bought thirteen different colored folders and each had twenty-eight dots. How many total dots are on her folders?

Card Set F

Each pack of baseball cards has fifteen cards. How many cards are in twenty-two packs?

Card Set F

How many eggs are in twelve dozen?

Card Set F

The boy scouts eat twenty-three grapes each on their campout. How many total grapes did the troop of eleven boys eat?

Card Set F

Bags of Reese's cups have twenty-one individually wrapped peanut butter cups. How many cups are in twenty-five bags?

Card Set F

The zoo has fifteen monkeys who eat fifteen bananas each day. How many bananas do they need each day for the monkeys?

Card Set F